





Use the array provided to solve each problem.


1) $10 \times 19 =$




2) $10 \times 14 =$




3) $12 \times 10 =$




4) $15 \times 10 =$



5) $11 \times 10 =$



6) $14 \times 10 =$



Answers

1. _____

2. _____

3. _____

4. _____

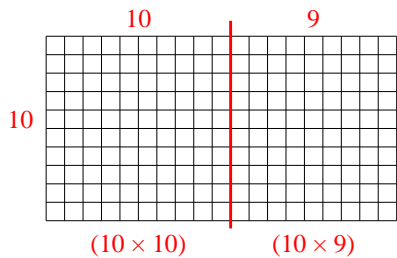
5. _____

6. _____

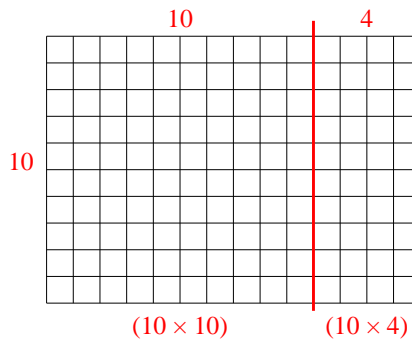


Use the array provided to solve each problem.

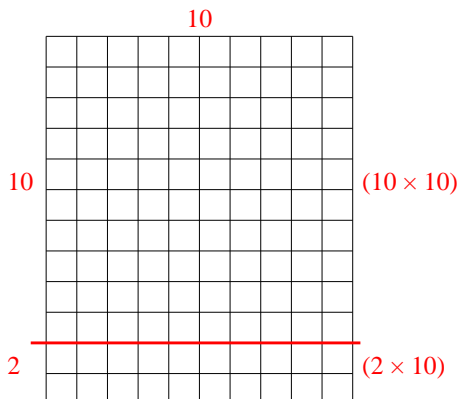
1) $10 \times 19 =$



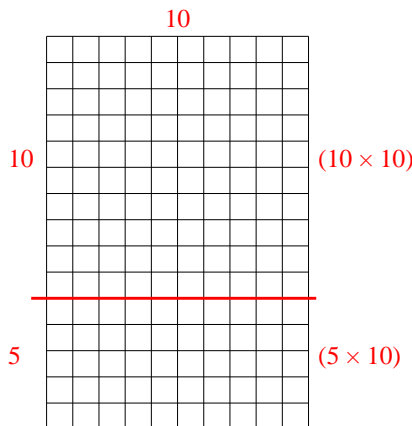
2) $10 \times 14 =$



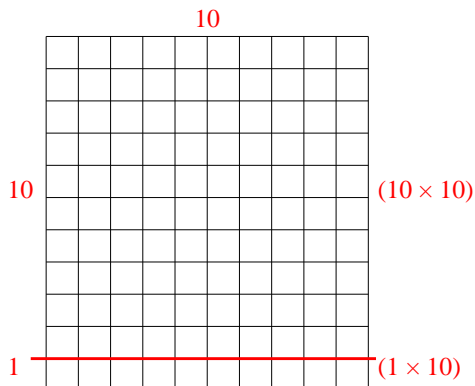
3) $12 \times 10 =$



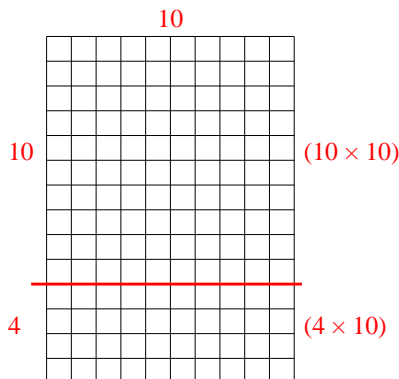
4) $15 \times 10 =$



5) $11 \times 10 =$



6) $14 \times 10 =$



Answers

1. 190

2. 140

3. 120

4. 150

5. 110

6. 140